

3.2

Find the intercepts for the graph of the equation.

1) $x + y = 5$

A) (0, 2) (0, 3)

B) (5, 3) (2, 5)

C) (2, 0) (3, 0)

D) (5, 0) (0, 5)

1) _____

2) $2x + y = 8$

A) (4, 0) (0, 8)

B) (3, 0) (2, 0)

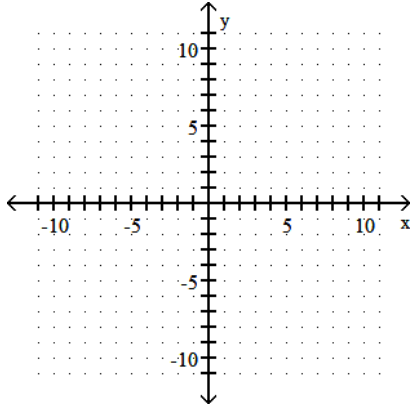
C) (8, 2) (3, 8)

D) (0, 3) (0, 2)

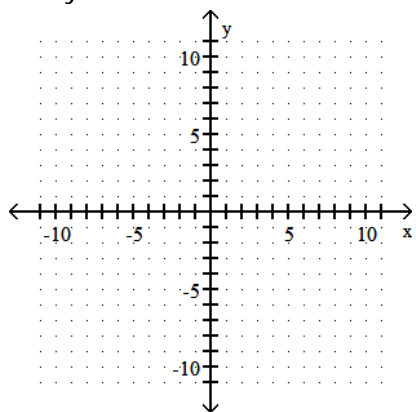
2) _____

Graph the linear equation.

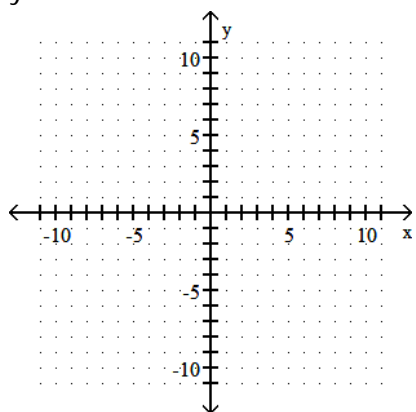
3) $-4x = y + 5$



4) $3x + y = 0$



5) $y = x + 3$



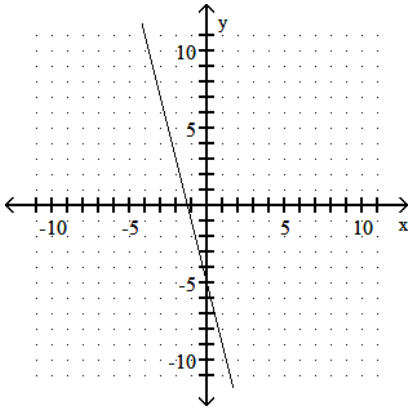
Answer Key

Testname: PRACTICE01A

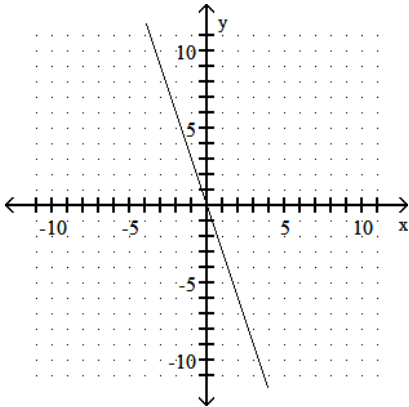
1) D

2) A

3)



4)



5)

